

TASK

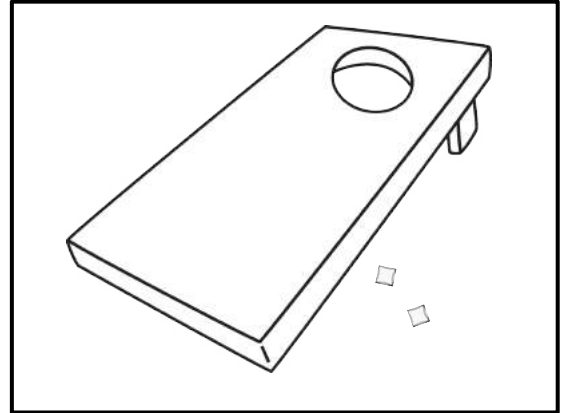
#6

TIME FOR GAMES

There are lots of outdoor games to play while you are camping. You and a few of the others set up three different games to play.

First up – the bean bag toss! In this game, there are three different ways to get points:

- Bean bag goes in the hole: **10 points**
- Bean bag lands on the platform, but doesn't go in the hole: **5 points**
- Bean bag touches the platform but lands on the ground: **2 points**



Each of the four teams chooses a name and they play an intense round! Here are the results:


TEAM NAME	2 point shots	5 point shots	10 point shots	Total Points
Team Awesome	###	###		
The Terrifying Taylors		###	###	
Team Anderson	###	### ###		
The Watson Warriors	###		###	

Use the tally chart to answer the questions:

1. Which team won the bean bag toss? _____
2. How many more points did Team Anderson get than The Watson Warriors?

3. The Watson Warriors were really hoping to get 100 points. What shots could they have made in order to increase their score to 100?

The second game is an egg and spoon relay race! There are three people on each team. Each person must carry the egg (on the spoon) around the tree and back. If the egg falls, that person has to start over again! The team with the shortest time wins!



Here are the results from the relay race. Rank each team from 1st place to 4th place.

TEAM NAME	RELAY TIME	PLACE (1 st to 4 th)
Team Awesome	68 seconds	
The Terrifying Taylors	54 seconds	
Team Anderson	73 seconds	
The Watson Warriors	95 seconds	

Use the chart to answer the questions:

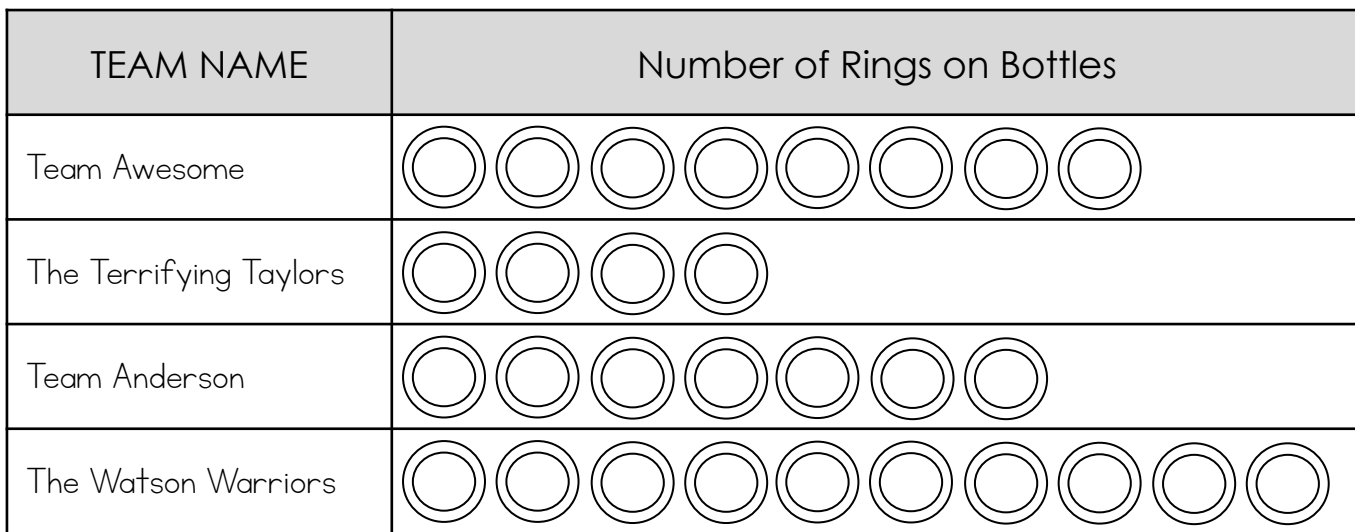
1. What was the difference in time between the first place and fourth place teams? _____
2. How much faster were The Terrifying Taylors than Team Anderson?

3. On Team Awesome, the first person took 21 seconds to get around the tree and back. The second person took 24 seconds. How long did it take for the last person to go around the tree and back?

4. By how many seconds did the Terrifying Taylors win the egg and spoon race? _____

The last game that you set up is the ring toss. For every ring that lands on a bottle, the team gets 5 points.

This picture graph shows the results from the ring toss game:



Use the chart to answer the questions:

1. How many points did each team get?

Team Awesome: _____

The Terrifying Taylors: _____

Team Anderson: _____

The Watson Warriors: _____

2. How many points did The Watson Warriors and Team Anderson get in all?

3. How many more points did Team Awesome get than The Terrifying Taylors?